



Arctic Ocean

North America

Europe

Asia

Atlantic Ocean

Pacific Ocean

Pacific Ocean

South America

Africa

Indian Ocean

Australia

Antarctica



Where is Scandinavia?

W.A.L.T:

Locate the countries of Scandinavia and their capital cities on a world map

Antarctica

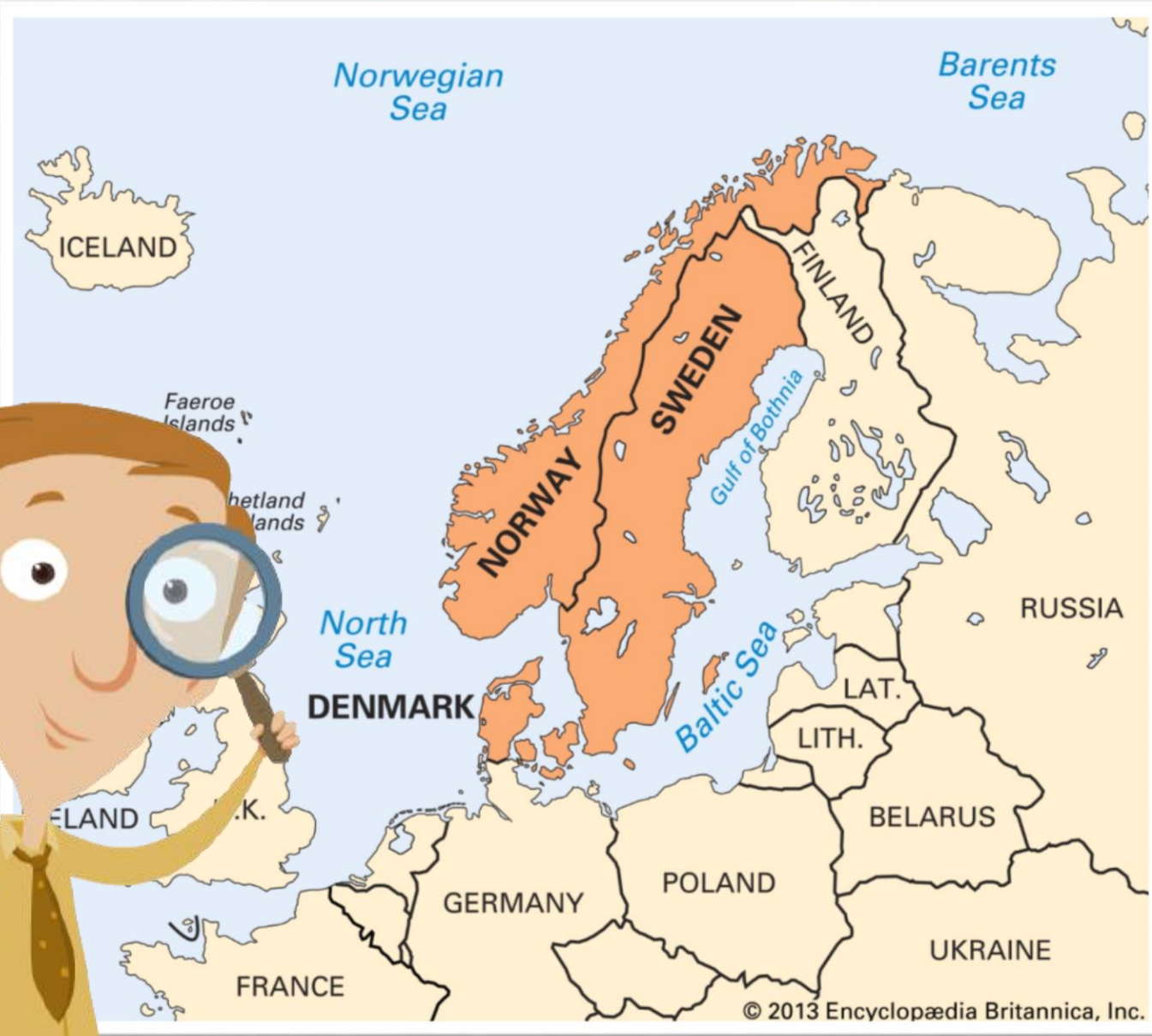
Have you heard of
Scandinavia? Do you
know where it is?
Think, Pair, Share!



Where do you think Scandinavia is on this map?





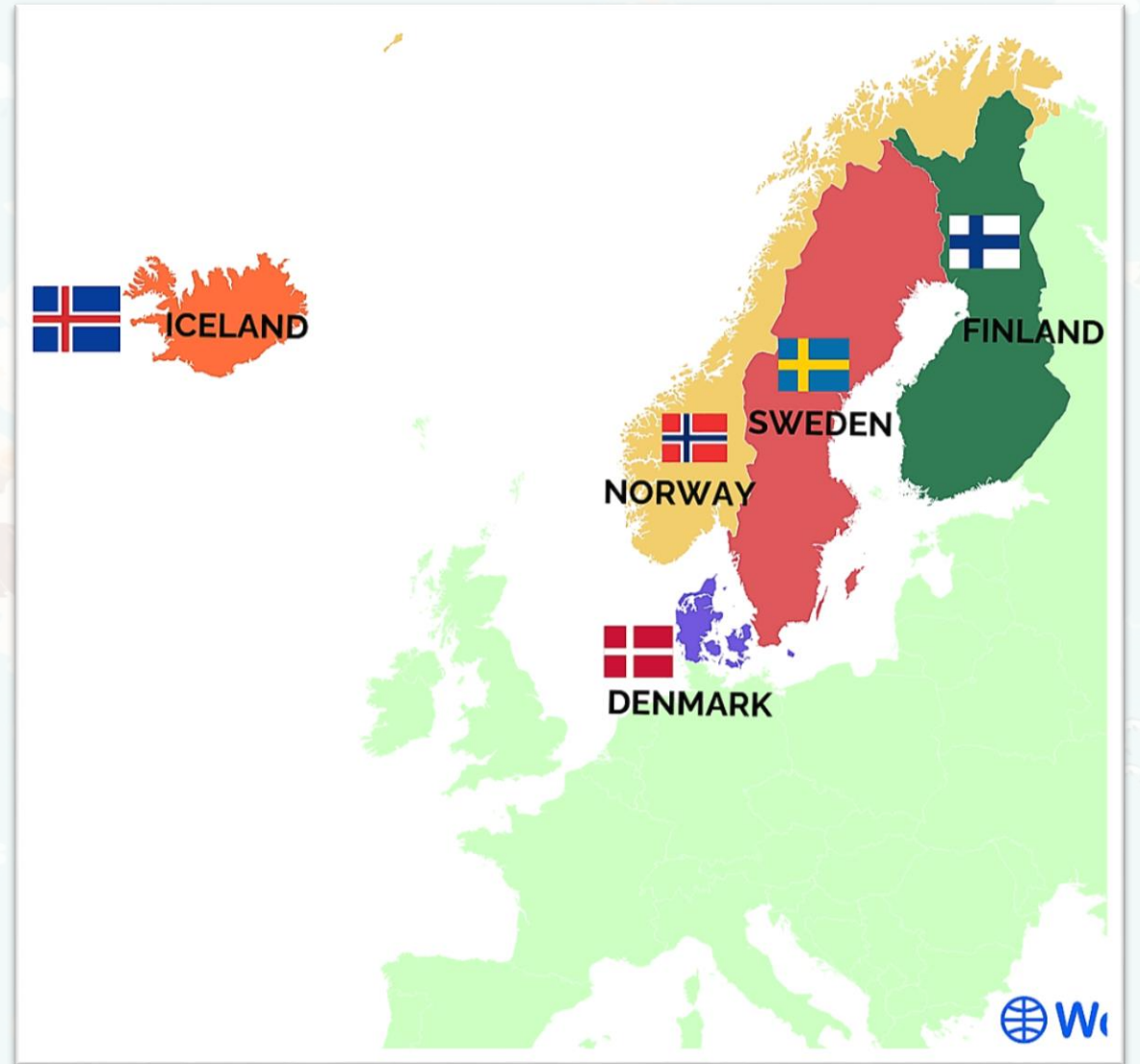


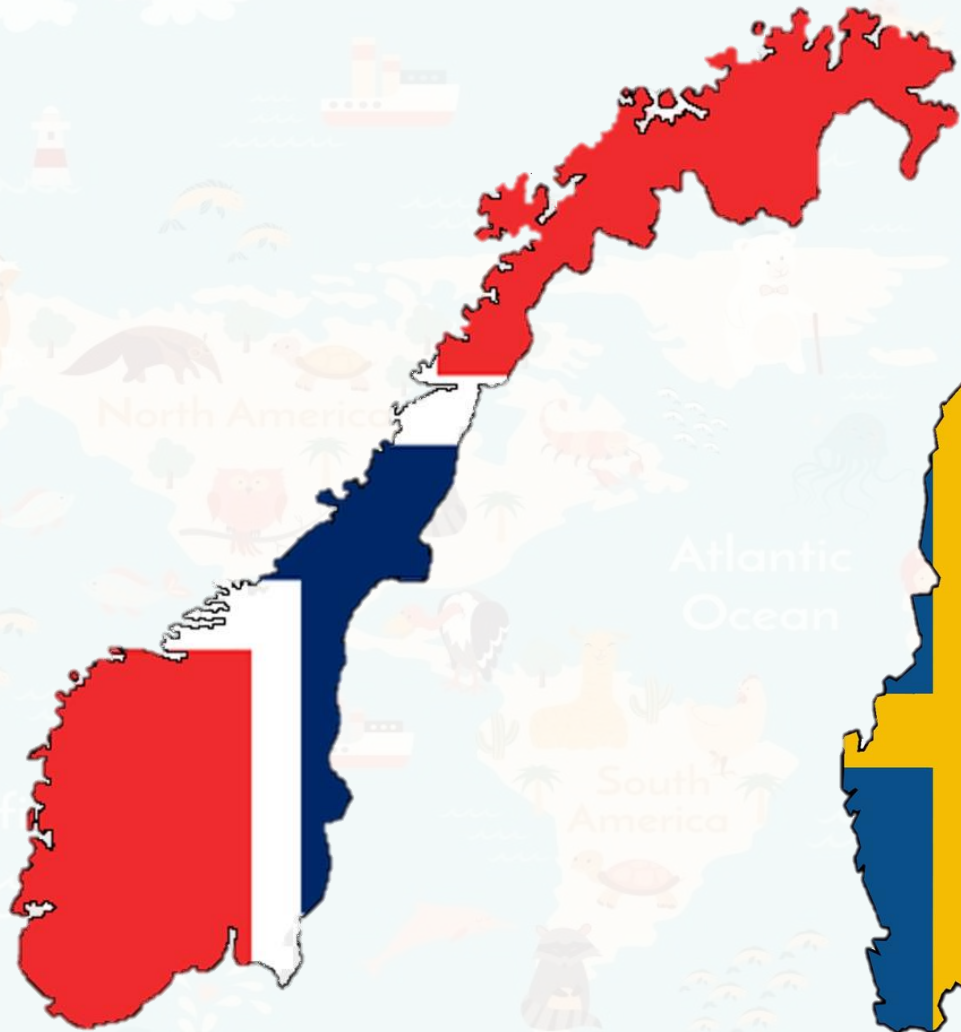
Scandinavia is an area in the north of Europe. It is made of three different countries that have similar cultures. These countries are **Norway, Sweden and Denmark.**

Sometimes people get a bit confused and add **Iceland** and **Finland** in with the Scandinavian countries.

However, these countries are not Scandinavian. Instead they are part of a group called the **Nordic** countries.

Nordic just means from the north. Iceland, Norway, Denmark, Sweden and Finland are all Nordic. However, just Denmark, Norway and Sweden are Scandinavian.





Norway



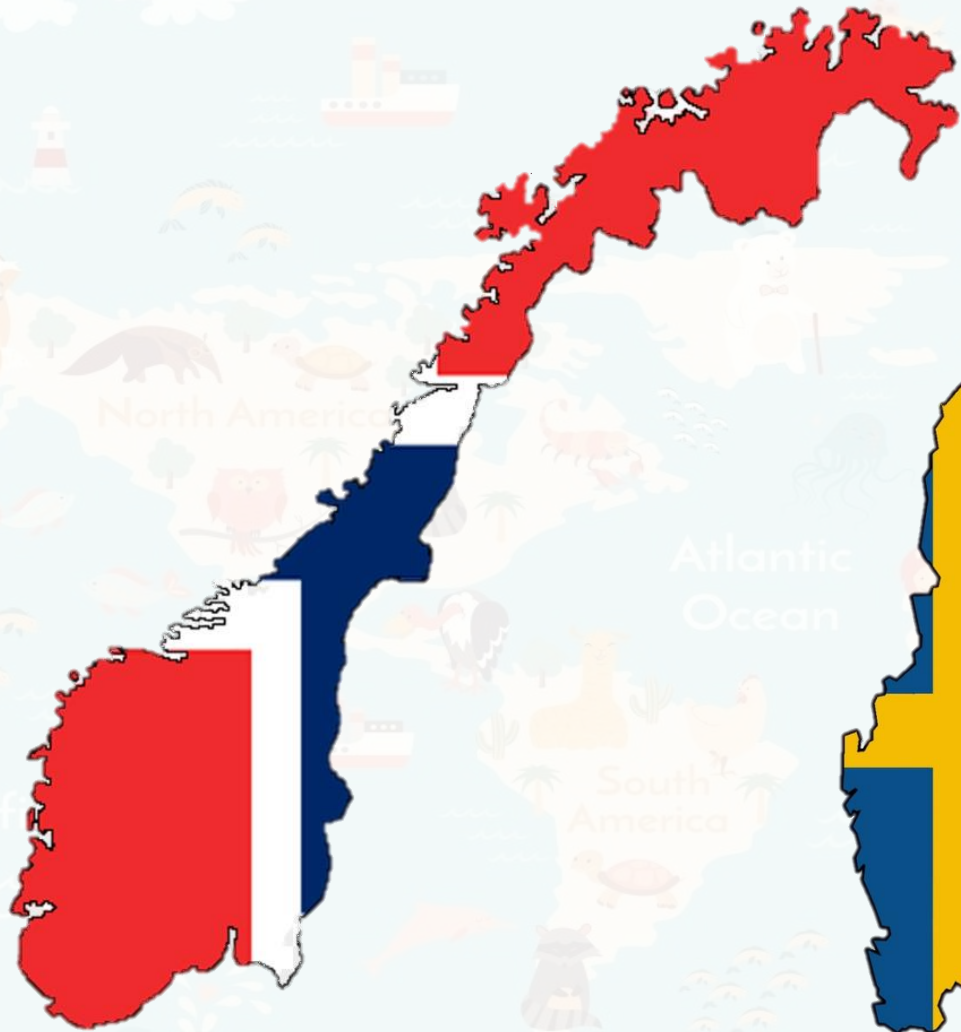
Sweden



Denmark

Do you know what the
capital cities of any
of the Scandinavian
countries are?
Think, Pair, Share!





Oslo



Stockholm



Copenhagen



Let's take a look at some pictures of the
Scandinavian countries.

When you look at the picture I want you
to answer 2 questions:

- What can you see in the picture?
- What does this tell you about life in
Scandinavia?



Pacific O

Pacific
Ocean





Pacific

Pacific
Ocean









Pacific

Pacific
Ocean





Рос

ific
ean



Pacific Ocean

Pacific Ocean



Pacific O

Pacific
Ocean



Pacific

cific
ean

Activity Time - Map Work

We're going to take a look at the Scandinavian countries on a map. We're going to investigate where the countries are, what their capitals are and what you find around them!




Activity Time - Map Work

Using your atlas or Google Maps, answer the map work questions on the worksheet. You will need colours and a pencil for this! Make sure you are neat when you are making map markings.

Where is Scandinavia? - Map Work

Use either Google Maps or an atlas to complete the map work down below:



Research the flag of each Scandinavian country. Then colour the country in the flag colours.		
The capital of Norway is: _____	The capital of Sweden is: _____	The capital of Denmark is: _____
What sea is north-west of Norway? _____	What sea is between Norway and the U.K? _____	
Label as many other European countries as you can. Use the first 3 letters to label them. E.G: Ireland = IRE		
Draw a star where each countries capital city is located on the map. You may use a pen to do this.		
Which Scandinavian country is smallest? _____	Which Scandinavian country is largest? _____	

Rang Maher 2021 www.rangmaher.com "Feel free to share!"